



CREST
Olympiads
#CRESTInnovator

CREST Science Olympiad (CSO) Worksheet *for*

Class 2



Topic

Types of Transport



@crestolympiads





info@crestolympiads.com



+91-98182-94134

Worksheet on Types of Transport

1. Ted lives in Australia and is going to visit Europe with his family for the summer holidays. Which of the following means of transport should he choose to go there the fastest?



REST
Olympiads

2. Select the odd one out based on the means of transport.

a.



b.



c.



d.



REST
Olympiads

3. Which of the following special means of transport can be found at farms?

a.



b.



c.




d.




REST
Olympiads

4. Point out the similarities between the means of transport shown in the picture.



- a. Both of them run on petrol.
- b. Both of them are means of rail transport.
- c. Both of them are public transport.
- d. Both of them are means of road transport.

5. Which of the following is the least expensive means of transport?



c.



d.



Answer Key

1. c - Ted should travel by aeroplane to reach Europe from Australia.
2. d - A boat is an example of water transport whereas all others are land transport.
3. a - A tractor is usually used on farms to carry out agricultural activities.
4. c - Both buses and the metro are modes of public transport.
5. b - Bicycle is the least expensive vehicle out of all the options.

More Questions Coming Soon – Keep Learning!

Difference between Ordinary & Extra-Ordinary is that "Little Extra"

Discover Our Ultimate Prep Kits!

Buy Previous Years Papers

1. Login at www.crestolympiads.com/login
2. Go to Dashboard -> Additional Practice -> Buy



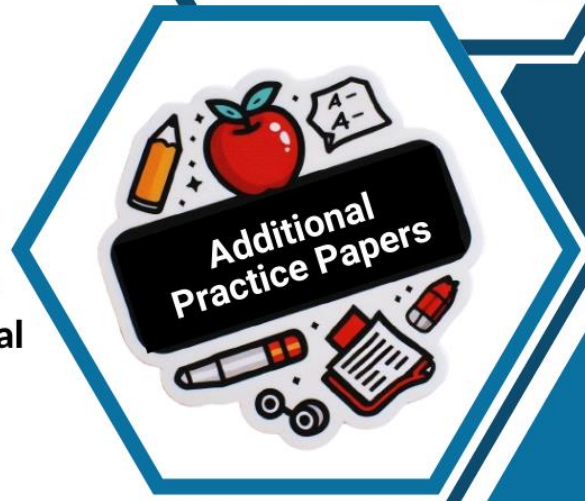
Buy Physical & Digital Workbooks at

<https://www.crestolympiads.com/olympiad-books>



Buy Additional Practice

1. Login at www.crestolympiads.com/login
2. After login, go to Dashboard -> Additional Practice -> Buy



@crestolympiads



info@crestolympiads.com



+91-98182-94134